



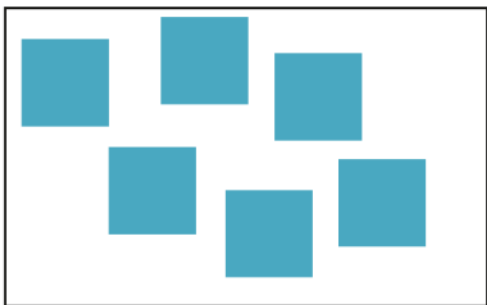
2- SONO DI PIÙ LE API A SINISTRA O A DESTRA ?






NR,
 E,
 R

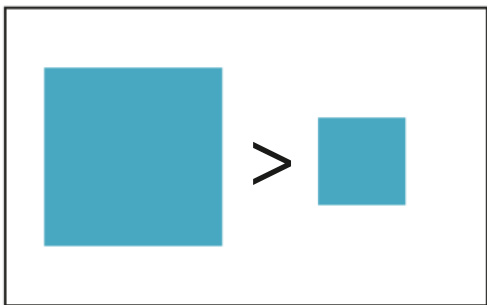
3- SONO DI PIÙ I QUADRATI O I CERCHI ?

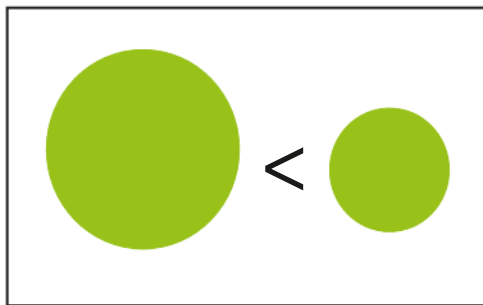




NR,
 E,
 R

4- QUALE IMMAGINE DI QUESTE DUE È CORRETTA ?





NR,
 E,
 R

5- INSERISCI IL SIMBOLO OPPORTUNO > < = OSSERVA L' ESEMPIO

2 3

8 7

9+5 95

4 3

85 50

8 9

63 91

NR, E, R

